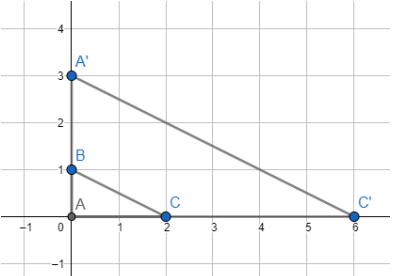
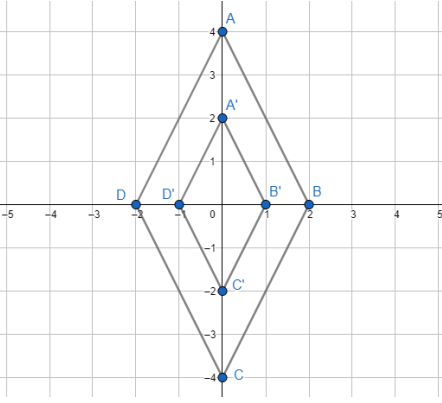
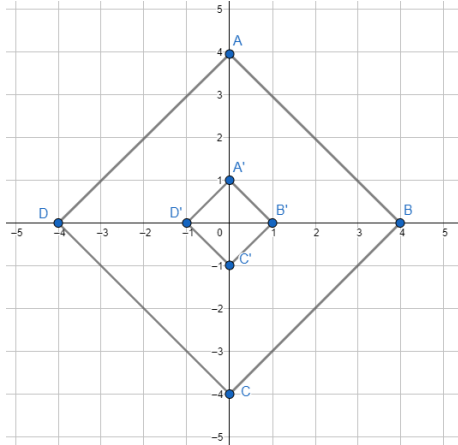
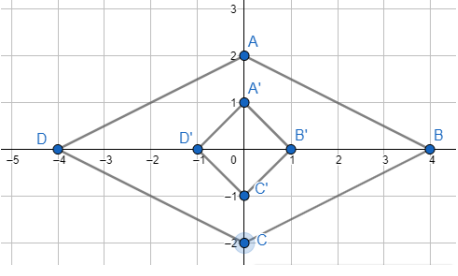
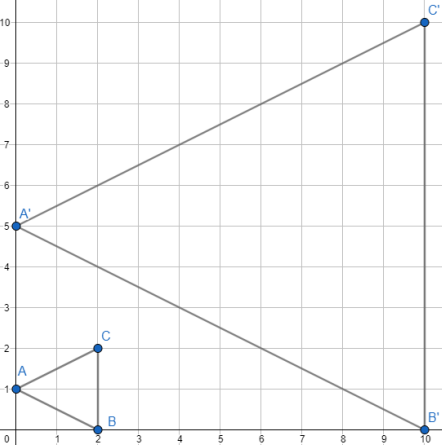
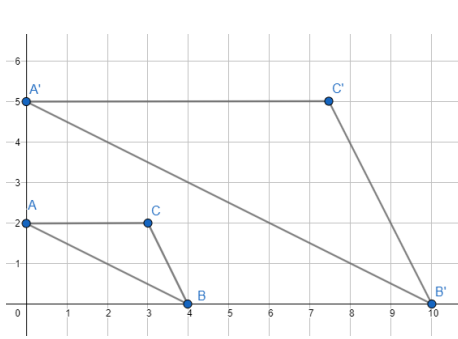


Dilation Practice

Match each image and preimage with the correct dilation.

<p>1.</p> 	<p>2.</p> 	<p>3.</p> 
<p>4.</p> 	<p>5.</p> 	<p>6.</p> 
<p>a. Reduction with scale factor $\frac{1}{4}$</p>	<p>b. Enlargement with scale factor 3</p>	<p>c. Enlargement with scale factor 2.5</p>
<p>d. Reduction with scale factor $\frac{1}{2}$</p>	<p>e. Not a dilation</p>	<p>f. Enlargement with a scale factor of 5</p>

Match each image with its dilation.

