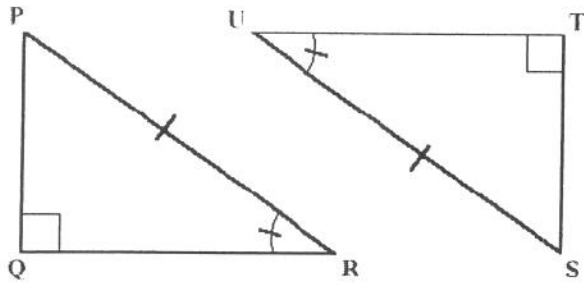


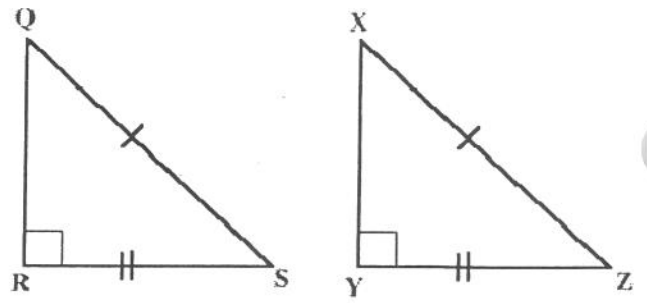
7. Prove $\overline{ST} \cong \overline{PQ}$



Statements

Reasons

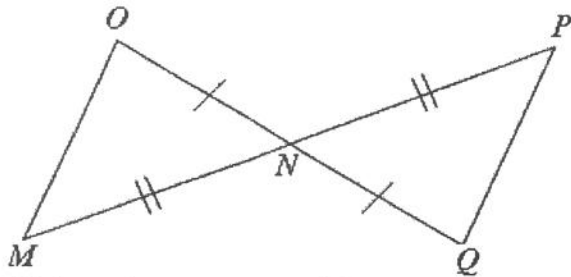
8. Prove $\angle Q \cong \angle X$



Statements

Reasons

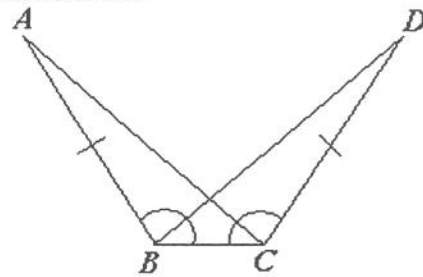
9. Prove $\angle Q \cong \angle O$



Statements

Reasons

10. Prove $\overline{AC} \cong \overline{DB}$



Statements

Reasons